

Escola: _____ Diretora: _____

Disciplina: _____ Professora: _____ Turma: _____

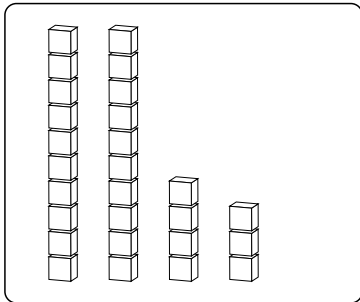
Aluno: _____ Data: _____



Dezena e Unidade

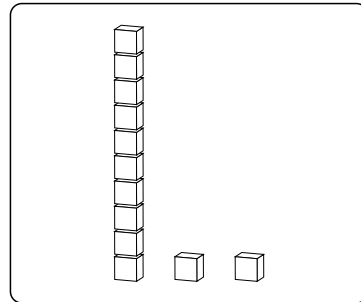


Conte e complete com as dezenas e as unidades correspondentes.



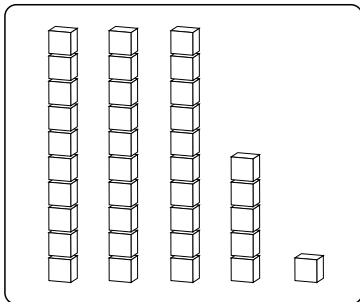
=

D	U



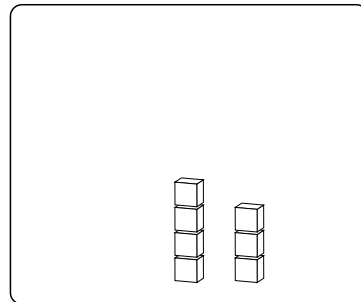
=

D	U



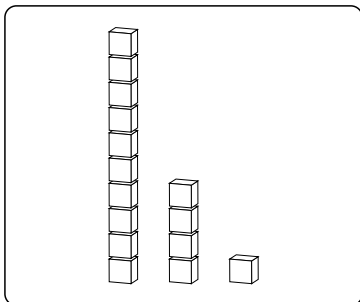
=

D	U



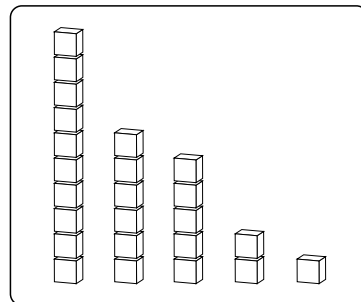
=

D	U



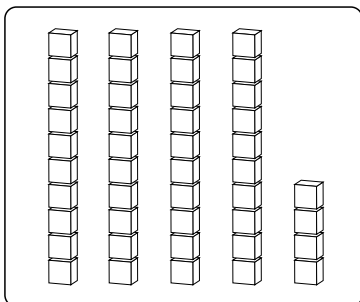
=

D	U



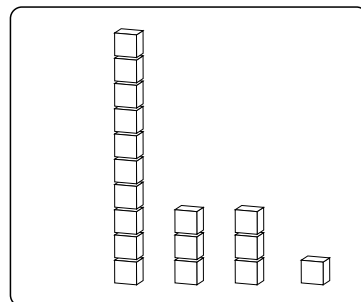
=

D	U



=

D	U



=

D	U

