

Escola: _____

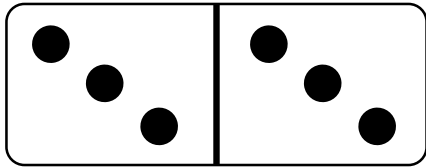

Turma: _____ Professora: _____

Aluno: _____ Data: _____



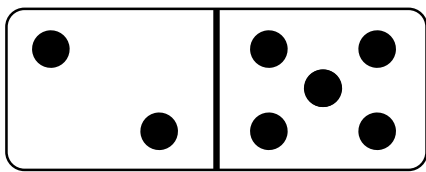
Dominó Matemático

Qual é a soma dos dominós?



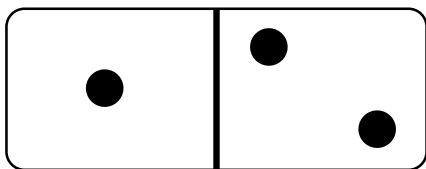
$$3 + 3 =$$

$$6$$



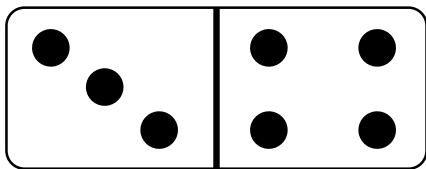
$$\underline{\quad} + \underline{\quad} =$$

$$\underline{\quad}$$



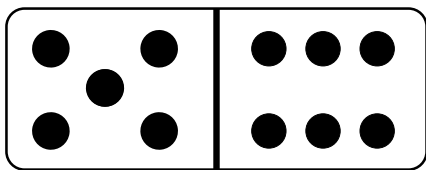
$$\underline{\quad} + \underline{\quad} =$$

$$\underline{\quad}$$



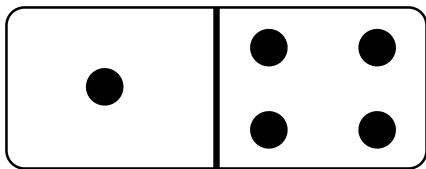
$$\underline{\quad} + \underline{\quad} =$$

$$\underline{\quad}$$



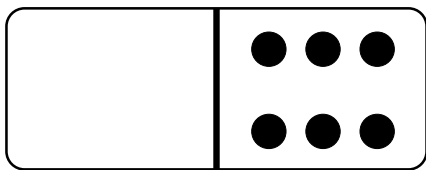
$$\underline{\quad} + \underline{\quad} =$$

$$\underline{\quad}$$



$$\underline{\quad} + \underline{\quad} =$$

$$\underline{\quad}$$



$$\underline{\quad} + \underline{\quad} =$$

$$\underline{\quad}$$

