


Escola: _____ Diretora: _____

Disciplina: _____ Professora: _____ Turma: _____


Aluno: _____ Data: _____





Formas Geométricas



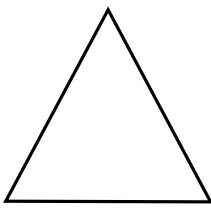
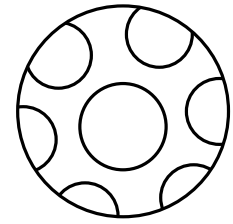

Pinte as formas que são semelhantes às do primeiro quadro.



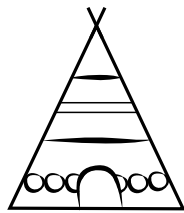
QUADRADO



CÍRCULO



TRIÂNGULO



RETÂNGULO

